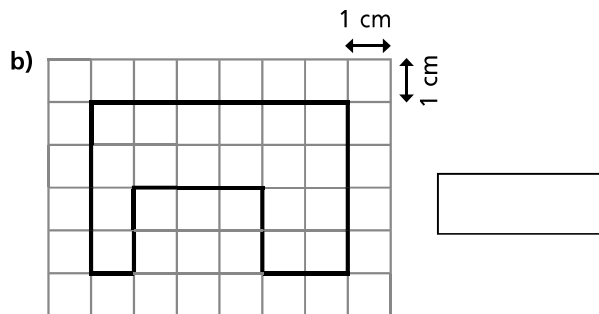
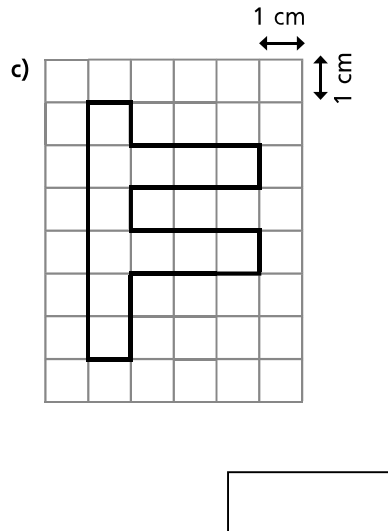
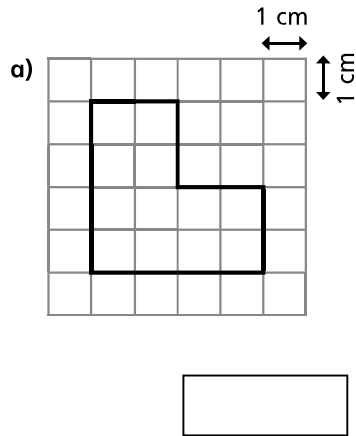
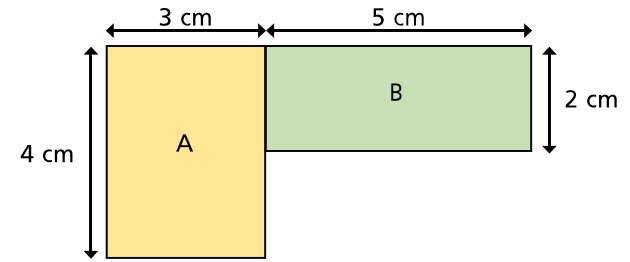


Area of compound shapes

- 1 On the grid, the area of each square is 1 cm^2 . Calculate the area of each shape.



2



- a) Work out the area of rectangle A

area =

- b) Work out the area of rectangle B

area =

- c) Work out the area of the compound shape.

area =

Talk about it with your partner.

- 3 Work out the area of each of the following shapes. Show all your working.

