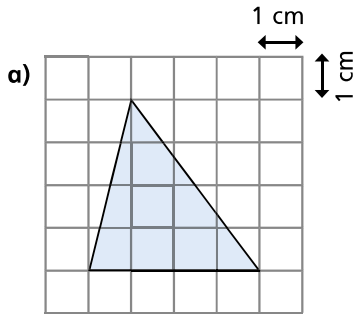
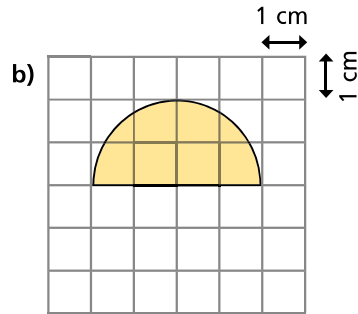


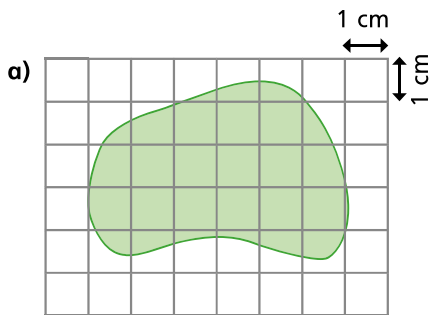
# Area of irregular shapes

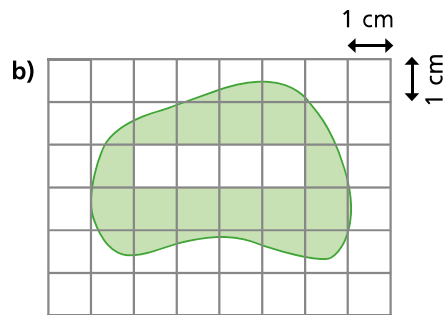
1 On the grid, the area of each square is  $1 \text{ cm}^2$   
Estimate the area of each shape.






2 Mo draws two shapes on a  $\text{cm}^2$  grid.  
Estimate the area of each shape.






How did you estimate the area of b)?  
Talk about it with your partner.



3 a) On the grid below, draw around your closed hand and estimate the area.

