

Area of rectangles

1 On the grid, the area of each square is 1 cm^2
Calculate the area of each rectangle.

a) c)

b)

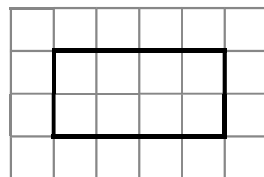
2 Complete the sentences to describe the rectangle.

There are rows.

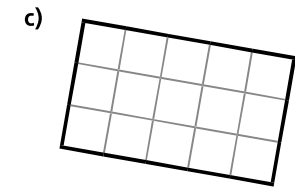
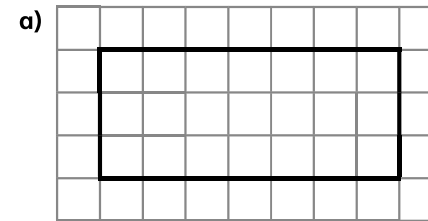
Each row has squares.

There are squares altogether.

\times =


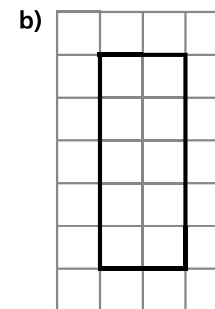


3 The area of each square is 1 cm^2
Work out the area of each rectangle.



\times =
area =

\times =
area =



\times =
area =

\times =
area =