

3 Complete the divisions.

a)

	5	3	5	6	0	

d)

	6	9	7	8	6	

b)

	9	2	7	3	6	

e)

	3	4	6	8	3	

c)

	4	6	5	2	4	

f)

	1	2	0	7	9	

Could you have calculated the answer to part f) more efficiently?

4 Work out the values of a , b and c .

9,415						
a	a	a	a	a	a	a

$a =$

b	b	b	b	b	b	b	b
5,328							

$b =$

120	120	120	120
c	c	c	c

$c =$

5 Find the missing digits.

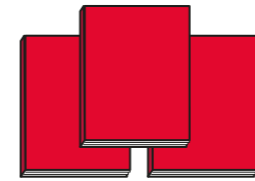


a)

		2	2		1
		8	9	6	

b)

		3		6	
		6	5		4

6 Books are available to buy in three different deals.

Deal A	Deal B	Deal C
		
£12.99	£38.16	£25.60

Which is the best deal?

Show your workings.
