


5 Complete the multiplications.


a) $3,126 \times 3 =$

c) $4,132 \times 6 =$



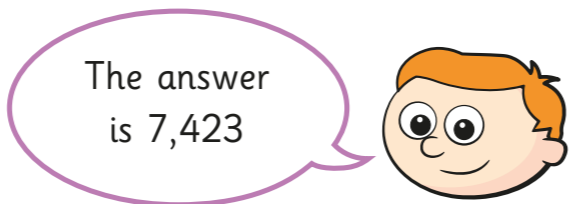
b) $4,812 \times 2 =$

d) $1,502 \times 5 =$



6 Ron is working out $7,423 \times 0$

$$\begin{array}{r}
 7\ 4\ 2\ 3 \\
 \times \quad \quad 0 \\
 \hline
 7\ 4\ 2\ 3
 \end{array}$$



Do you agree with Ron? _____

Did Ron have to use a column method? Is there a quicker way?

7 Work out these multiplications.

$2,846 \times 2 =$

$2,846 \times 4 =$

$2,846 \times 8 =$

What do you notice about the answers?

8

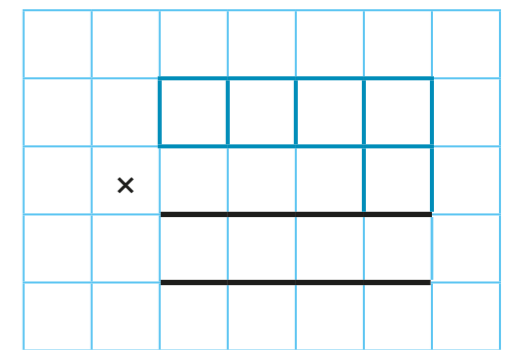
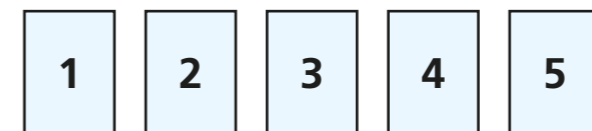
$248 \times 10 = 2,480$

Without using the formal method, how could you use this fact to calculate 248×9 ?

Check your answer using the formal method.

Which method was easier?

9 Use each digit card once to write a multiplication.



How many different products can you find?

What is the closest product to 8,000?

