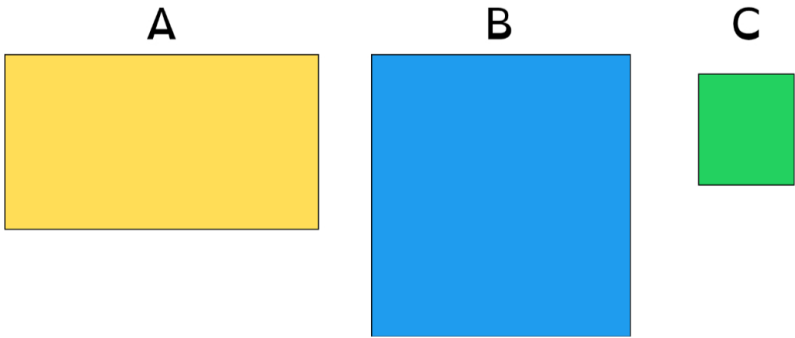
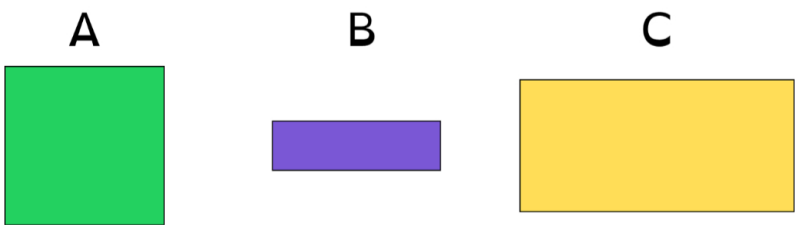


1. Which of the following shapes has the greatest area?



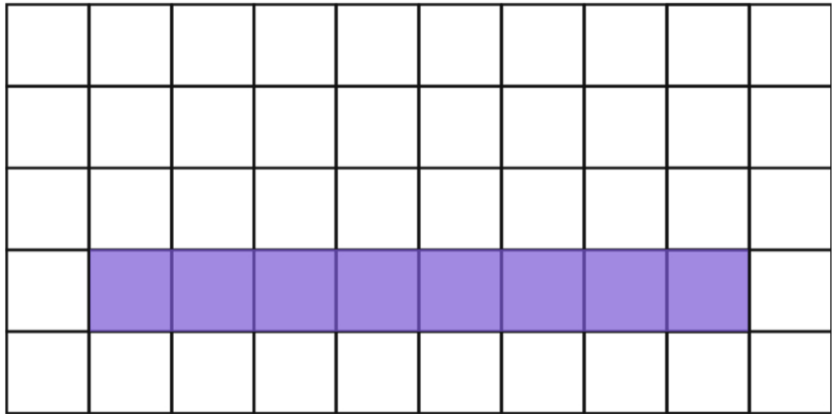
Write your answer in the space below:

2. Which of the following shapes has the smallest area?



Write your answer in the space below:

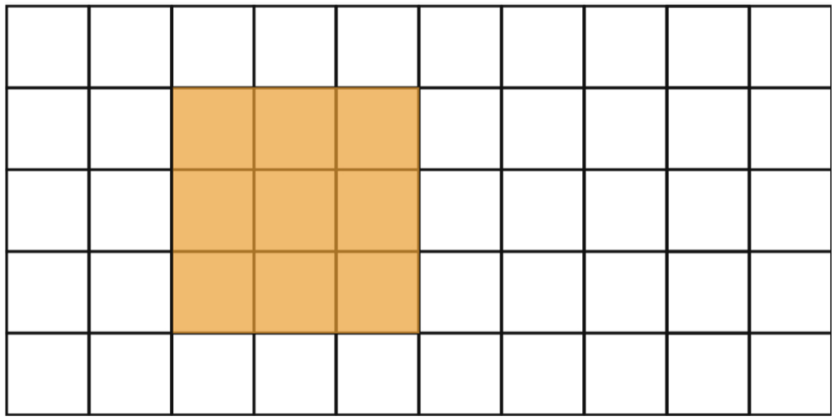
3. What is the area of the shape below?



Tick **ONE** box next to the correct answer

- ☐ 8 cm²
- ☐ 18 cm
- ☐ 9 cm²

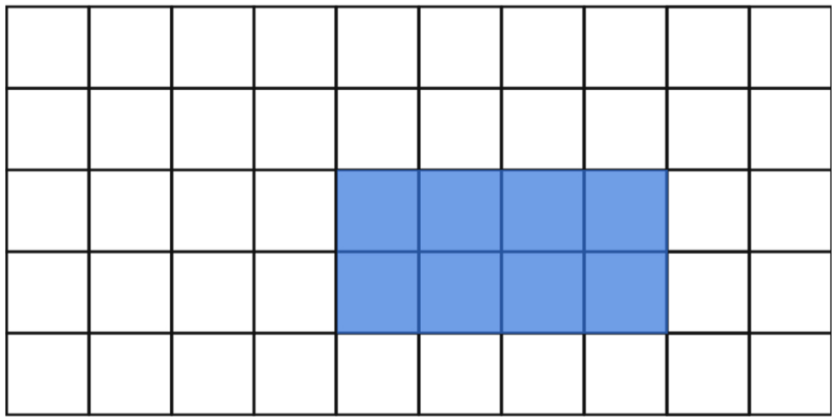
4. What is the area of the shape below?



Tick **ONE** box next to the correct answer

- ☐ 3 cm
- ☐ 12 cm
- ☐ 9 cm²

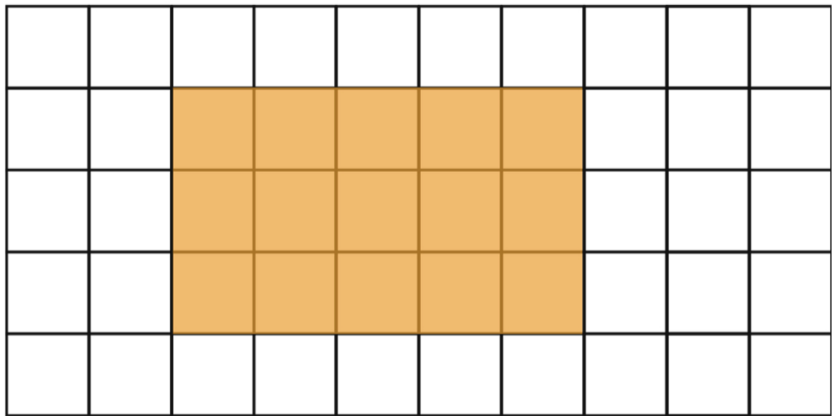
5. What is the area of the shape below?



Tick **ONE** box next to the correct answer

- ☐ 8 cm²
- ☐ 12 cm
- ☐ 6 cm²

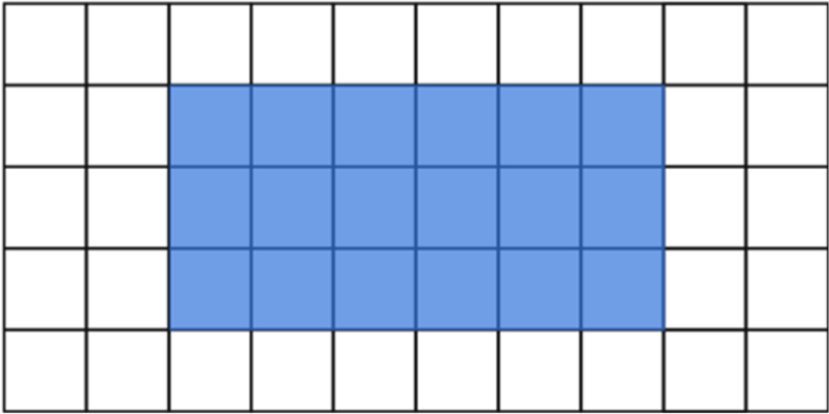
6. What is the area of the shape below?



Tick **ONE** box next to the correct answer

- ☐ 8 cm²
- ☐ 16 cm
- ☐ 15 cm²

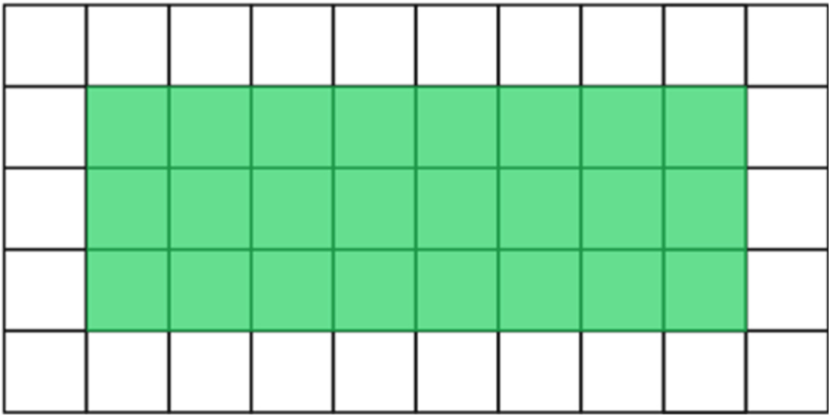
7. What is the area of the shape below?



Tick **ONE** box next to the correct answer

- ☐ 18 cm
- ☐ 18 cm²
- ☐ 9 cm²

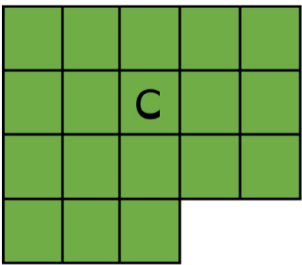
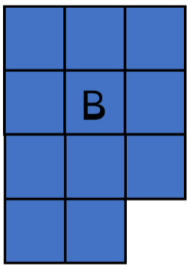
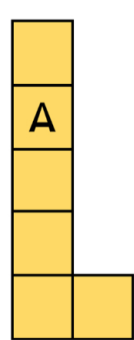
8. What is the area of the shape below?



Tick **ONE** box next to the correct answer

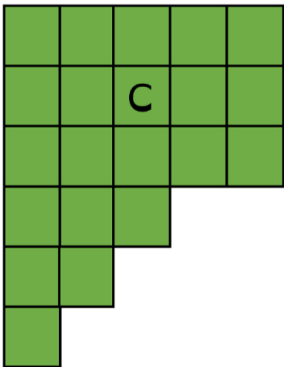
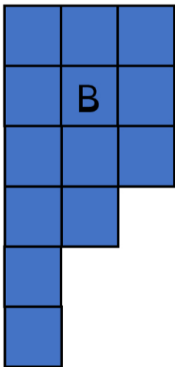
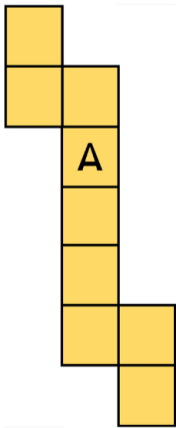
- ☐ 11 cm²
- ☐ 24 cm²
- ☐ 22 cm

9. Which shape has the greatest area?



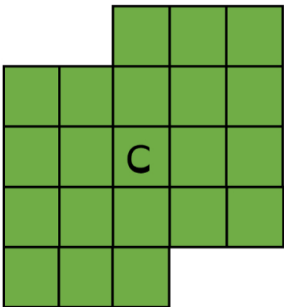
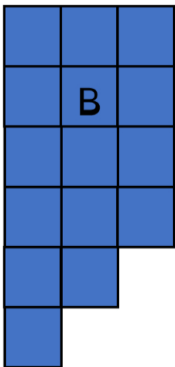
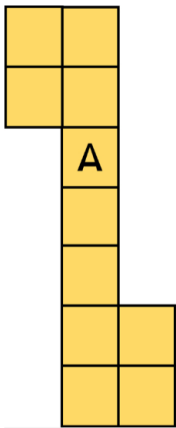
Write your answer in the space below:

10. Which shape has the greatest area?



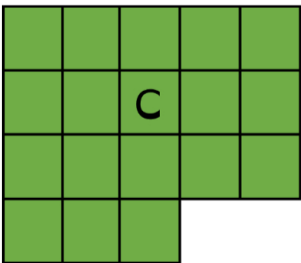
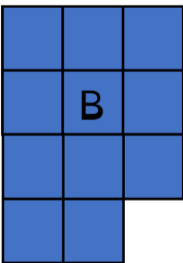
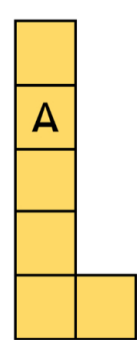
Write your answer in the space below:

11. Which shape has the greatest area?



Write your answer in the space below:

12. Which of the shapes has an area of 11 cm²?



Write your answer in the space below:
