

# The 2 times-table

1 Write a fact from the 2 times-table to match the picture.

a)




$$\square \times \square = \square$$

b)



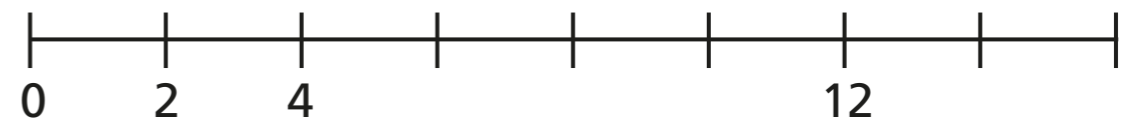
$$\square \times \square = \square$$

c)



$$\square \times \square = \square$$

2 a) Complete the number line.



b) Which times-table does the number line show?


Tick your answer.

1 times-table      2 times-table


3 times-table

How do you know?


3 Complete the array and times-table fact so that they match.



$$2 \times 2 = \square$$



$$2 \times 5 = \square$$



$$2 \times \square = 8$$

4 Complete the number sentences.

a)  $3 \times 2 =$

f)   $= 12 \times 2$

b)   $= 9 \times 2$

g)  $2 \times$    $= 2$

c)  $2 \times 5 =$

h)  $2 \times 0 =$

d)  $2 \times$    $= 4$

i)  $14 = 2 \times$

e)  $12 =$    $\times 2$

j)   $\times 2 = 22$


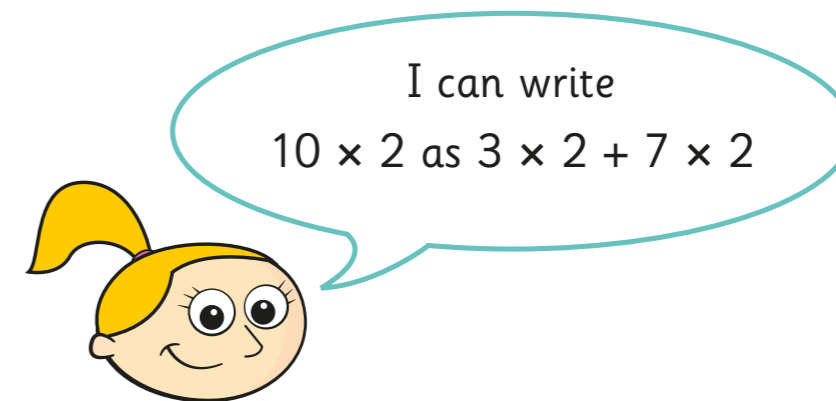
5 Teddy has £8

Rosie has twice as much money as Teddy.

How much money does Rosie have?

Rosie has £

6 Eva is writing  $10 \times 2$  in different ways.



Find three more ways that you can write  $10 \times 2$

Use counters to help you.

$\times$    $+$    $\times$

$\times$    $+$    $\times$

$\times$    $+$    $\times$

Compare answers with a partner.

